



# INDIAN SCHOOL AL WADI AL KABIR

DEPARTMENT OF MATHEMATICS (2025 – 2026)

TOPIC: NUMBER CONCEPTS (0-30)

WORKSHEET- 1

RESOURCE PERSON: Mrs. Anuradha Sharma

NAME: \_\_\_\_\_ CLASS: I SEC: \_\_\_\_\_ DATE: \_\_\_\_\_

**Q1. Write the missing numerals in each row.**

a) 17 \_\_\_\_\_ 19 \_\_\_\_\_ 21

b) \_\_\_\_\_ 27 \_\_\_\_\_ 29 \_\_\_\_\_

**Q2. Write the number which comes before and after the given number.**

a) \_\_\_\_\_ 12

b) 7 \_\_\_\_\_

c) \_\_\_\_\_ 29

d) 19 \_\_\_\_\_

e) \_\_\_\_\_ 15

f) 23 \_\_\_\_\_

**Q3. Write the number between.**

a) 24 \_\_\_\_\_ 26

b) 6 \_\_\_\_\_ 8

CHECKED BY: ACADEMIC COORDINATOR – CLASS - I

ISWK/DEPARTMENT OF MATHEMATICS /2025-2026

**Q4. Compare the numbers and put the correct symbol/sign  $>$ ,  $<$  or  $=$ .**



a) 

22		26
----	--	----



b) 

12		11
----	--	----

**Q5. Colour the picture of the star with the greater number in yellow.**



**Q6. Colour the picture of the cloud with the smaller number in blue.**



**Q7. Write the number names.**

	T	O	
a.	1	1	
b.	2	1	
c.		8	
d.	2	3	

**Q8. Fill in the blanks.**

1. 1 more than 12 is \_\_\_\_\_
2. 1 less than 10 is \_\_\_\_\_
3. One more than 27 is \_\_\_\_\_
4. One less than 16 is \_\_\_\_\_
5. 1 more than 19 is \_\_\_\_\_